



Free Questions for **OG0-021** by **braindumpscollection**

Shared by **Evans** on **12-12-2023**

For More Free Questions and Preparation Resources

Check the Links on Last Page

Question 1

Question Type: MultipleChoice

Which of the following answers correctly describes the junction relationship?

Options:

- A- It connects structural relationships of different types
- B- It connects dynamic relationships of the same type
- C- It connects dynamic relationships of different types
- D- It connects structural relationships of the same type

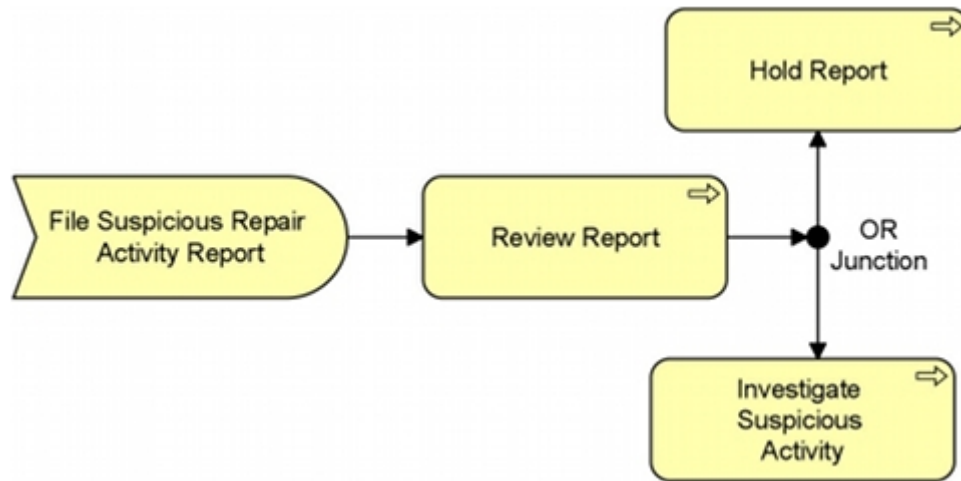
Answer:

B

Question 2

Question Type: MultipleChoice

The PRO-FIT automobile insurance division of ArchiSurance instructs its employees to watch carefully for claims that may be fraudulent, and to file a Suspicious Activity Report if they suspect fraud. Consider the following diagram that describes how PRO-FIT reacts when its employees suspect fraud:



Which of the following statements is expressed by the diagram?

Options:

- A- Investigations of suspicious activity can be triggered by report reviews
- B- Suspicious Repair Activity Reports are reviewed before they are filed
- C- Suspicious Repair Activity Report Filed is the process that always occurs first

D- The same people file reports and review them

Answer:

A

Question 3

Question Type: MultipleChoice

Within the Implementation & Migration Extension, which concept is the only one that models behavior?

Options:

A- Deliverable

B- Plateau

C- Gap

D- Work Package

Answer:

D

Question 4

Question Type: MultipleChoice

The team of business architects at ArchiSurance wants to tailor ArchiMate to the specific needs and characteristics of their organization.

Which of the following options to tailor the language is not advisable?

Options:

- A-** Select a subset of the ArchiMate concepts and relationships
- B-** Add new organization-specific concepts and relationships to the business layer metamodel
- C-** Define organization-specific specializations of existing business layer concepts
- D-** Add organization-specific attributes to existing business layer concepts

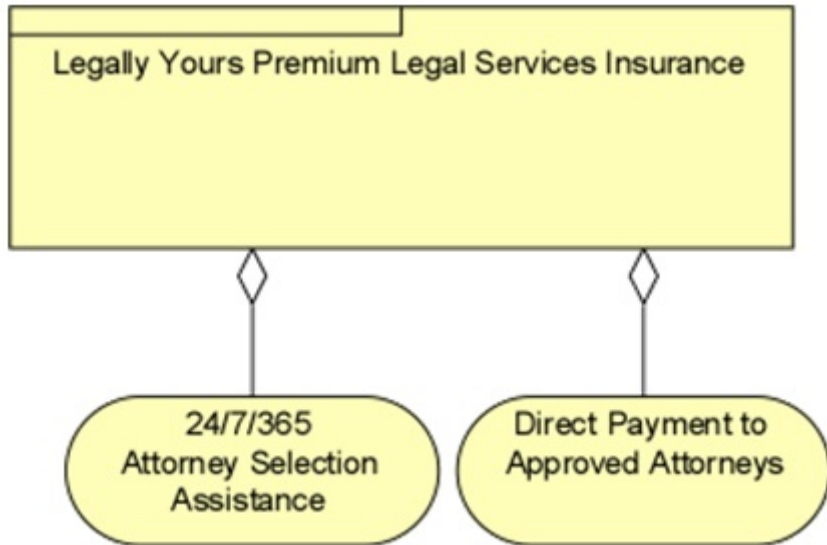
Answer:

B

Question 5

Question Type: MultipleChoice

The Legally Yours division of ArchiSurance has introduced a new product described in the following diagram:



Based on the diagram, what can we tell about the Legally Yours Premium Legal Services Insurance product?

Options:

A- It is delivered by two separate departments

- B- It has two separate structural components
- C- It includes two distinct services
- D- It offers specific services that are not included with any other product

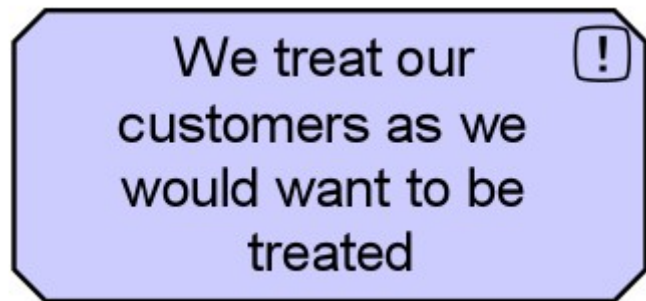
Answer:

C

Question 6

Question Type: MultipleChoice

Consider the following symbol that represents information about a major systems and process transformation project:



What concept does this symbol represent?

Options:

- A- A constraint
- B- A principle
- C- A goal
- D- A requirement

Answer:

B

Question 7

Question Type: MultipleChoice

At ArchiSurance, a Risk Assessment service provided by a Risk Measurement application enables actuaries to assess and mitigate financial risks as part of the Enterprise Risk Management process.

Which combination of relationships, when added to this diagram, would best represent this situation?

Options:

- A- 1. Realization and 2. Assignment
- B- 1. Used by and 2. Realization
- C- 1. Realization and 2. Realization
- D- 1. Realization and 2. Used By

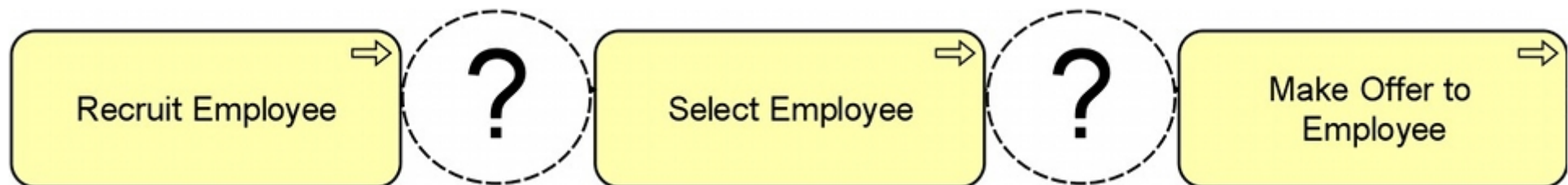
Answer:

D

Question 8

Question Type: MultipleChoice

At ArchiSurance, the Recruit Employee process passes information to the Select Employee process, which in turn passes information to the Make Offer to Employee process:



Which ArchiMate relationship should be used to express the passage of information between processes?

Options:

A- Triggering

B- Access

C- Flow

D- Assignment

Answer:

C

Question 9

Question Type: MultipleChoice

Which of the following is the least appropriate to be modeled with the ArchiMate language?

Options:

- A- Product architecture
- B- Business process architecture
- C- Application landscape
- D- Internal software structure

Answer:

D

Question 10

Question Type: MultipleChoice

Consider the following statements:

1. An application component is a self-contained unit of functionality.
2. An application component may perform one or more application functions.
3. The name of an application component should preferably be a noun.

Which of the following answers regarding the statement is correct?

Options:

- A- 1 and 2 are correct, 3 is not correct
- B- 2 and 3 are correct, 1 is not correct
- C- 1 and 3 are correct, 2 is not correct
- D- 1, 2 and 3 are all correct

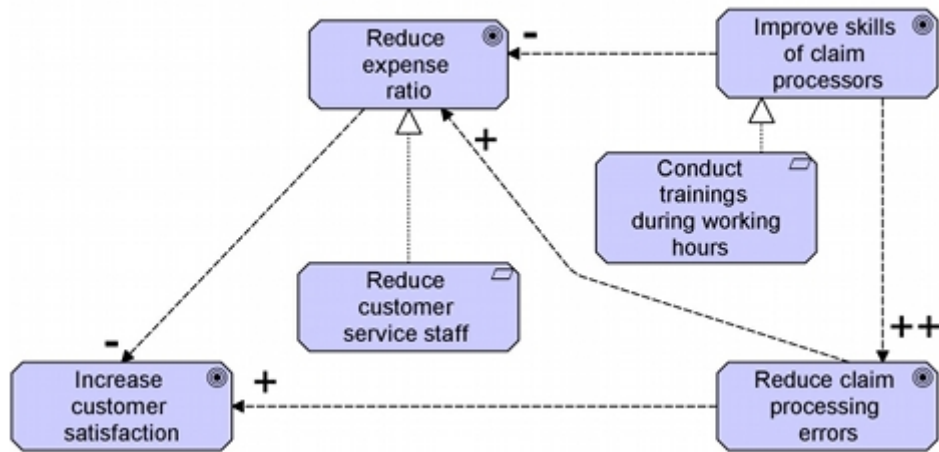
Answer:

D

Question 11

Question Type: MultipleChoice

The following is an example of an ArchiMate Goal Contribution view:



Which goals negatively influence other goals?

Options:

- A- Reduce expense ratio and Improve skills of claim processors
- B- Reduce customer service staff and Conduct trainings during working hours
- C- Reduce claim processing errors and Reduce expense ratio
- D- Improve skills of claim processors and Reduce customer service staff

Answer:

A

To Get Premium Files for OG0-021 Visit

<https://www.p2pexams.com/products/og0-021>

For More Free Questions Visit

<https://www.p2pexams.com/the-open-group/pdf/og0-021>

