



Free Questions for 200-301 by dumpshq

Shared by Joseph on 05-09-2022

For More Free Questions and Preparation Resources

Check the Links on Last Page

Question 1

Question Type: MultipleChoice

Refer to the exhibit.

Image not found or type unknown



Refer to the exhibit. An engineer is asked to configure router R1 so that it forms an OSPF single-area neighbor relationship with R2. Which command sequence must be implemented to configure the router?

Image not found or type unknown



Options:

- A) Option A
- B) Option B
- C) Option C
- D) Option D

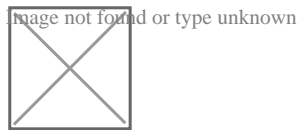
Answer:

B

Question 2

Question Type: MultipleChoice

Refer to the exhibit.



Which change to the configuration on Switch2 allows the two switches to establish an EtherChannel?

Options:

- A) Change the protocol to EtherChannel mode on.
- B) Change the LACP mode to active
- C) Change the LACP mode to desirable
- D) Change the protocol to PAqP and use auto mode

Answer:

B

Question 3

Question Type: MultipleChoice


Refer to the exhibit.

image not found or type unknown



Refer to the exhibit. Each router must be configured with the last usable IP address in the subnet. Which configuration fulfills this requirement?

image not found or type unknown



Options:

A) Option A

- B) Option B
- C) Option C
- D) Option D

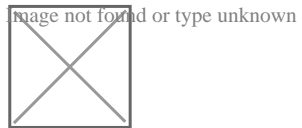
Answer:

C

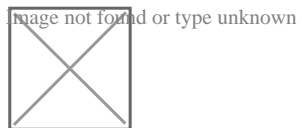
Question 4

Question Type: MultipleChoice

Refer to the exhibit.



Refer to the exhibit. All routers in the network are configured R2 must be the DR. After the engineer connected the devices, R1 was elected as the DR. Which command sequence must be configure on R2 to Be elected as the DR in the network?



Options:

- A) Option A
- B) Option B
- C) Option C
- D) Option D

Answer:

B

Question 5

Question Type: MultipleChoice

An engineer is configuring data and voice services to pass through the same port. The designated switch interface fastethernet0/1 must transmit packets using the same priority for data when they are received from the access port of the IP phone. Which configuration must be used?

A)

Image not found or type unknown



B)

Image not found or type unknown



C)

Image not found or type unknown



D)

Image not found or type unknown



Options:

A) Option A

B) Option B

C) Option C

D) Option D

Answer:

A

Question 6

Question Type: MultipleChoice

An engineer has configured the domain name, user name, and password on the local router. What is the next step to complete the configuration for a Secure Shell access RSA key?

Options:

A) crypto key Import rsa pem

B) crypto key pubkey-chain rsa

C) crypto key generate rsa

D) crypto key zeroize rsa

Answer:

C

Question 7

Question Type: MultipleChoice

Refer to the exhibit.

Image not found or type unknown



Refer to the exhibit Which switch becomes the root of a spanning tree for VLAN 10 if the primary switch fails and all links are of equal speed?

Image not found or type unknown



Options:

A) SW1

B) SW2

C) SW3

D) SW4

Answer:

C

To Get Premium Files for 200-301 Visit

<https://www.p2pexams.com/products/200-301>

For More Free Questions Visit

<https://www.p2pexams.com/cisco/pdf/200-301>

