



Free Questions for CSQA by dumpshq

Shared by Shepard on 20-10-2022

For More Free Questions and Preparation Resources

Check the Links on Last Page

Question 1

Question Type: MultipleChoice

Which layer of management is the weakest link in a successful quality management program?

Options:

A- Top

B- Quality Champion

C- Middle

Answer:

C

Question 2

Question Type: MultipleChoice

Requirements reviews, code walkthroughs, and inspections are examples of:

Options:

A- Verification

B- Validation

Answer:

A

Question 3

Question Type: MultipleChoice

Which is the best positioning of a quality manager within the IT organization?

Options:

A- Senior IT Manager

B- Manager of Systems Programming

C- Manager of Computer Operations

D- Outside of the IT Function

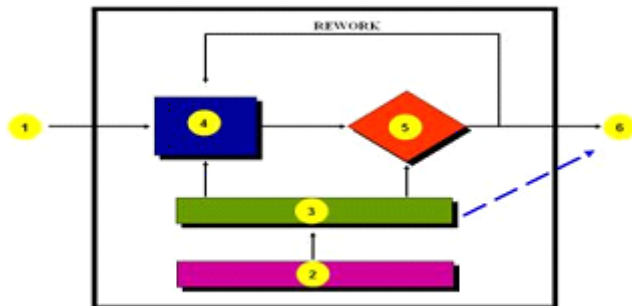
Answer:

A

Question 4

Question Type: MultipleChoice

In the diagram



In the diagram of the tester's work bench, the box labeled (4) is the:

Options:

A- Input(s)

B- Deliverable(s)

C- Policy

D- Check Procedures

E- Do Procedures

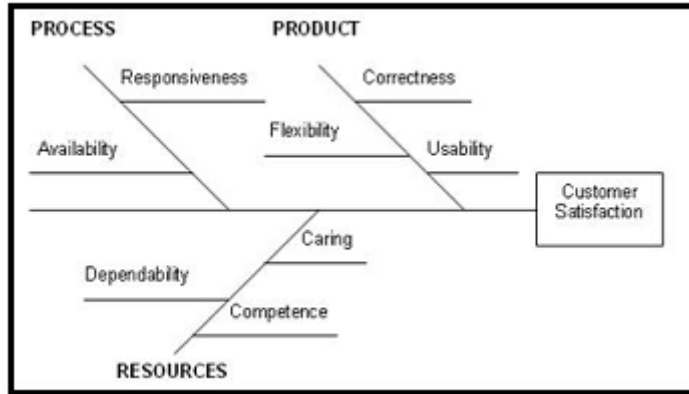
Answer:

E

Question 5

Question Type: MultipleChoice

In the diagram



The diagram is an example of a(n):

Options:

- A- Process Map Diagram
- B- Affinity Diagram
- C- Force Field Diagram
- D- Flowchart
- E- Cause-and-Effect Diagram

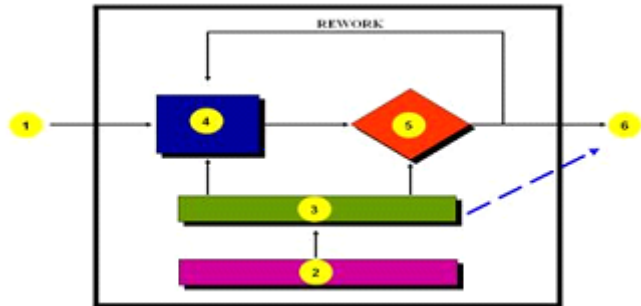
Answer:

E

Question 6

Question Type: MultipleChoice

In the diagram



In the diagram of the tester's work bench, the box labeled (2) is the:

Options:

- A- Input(s)
- B- Standard(s)
- C- Policy
- D- Check Procedures

E- Do Procedures

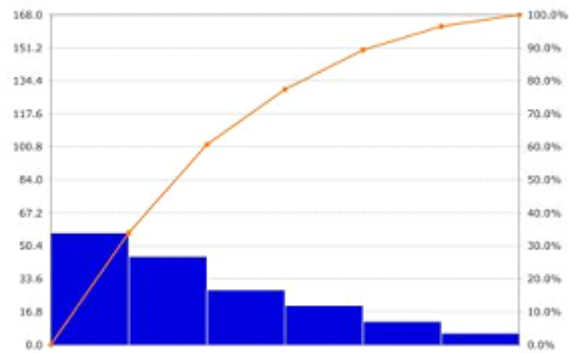
Answer:

C

Question 7

Question Type: MultipleChoice

In the diagram



The diagram is called a:

Options:

- A- Run Chart
- B- Pie Chart
- C- Bar Chart
- D- Pareto Chart
- E- Control Chart

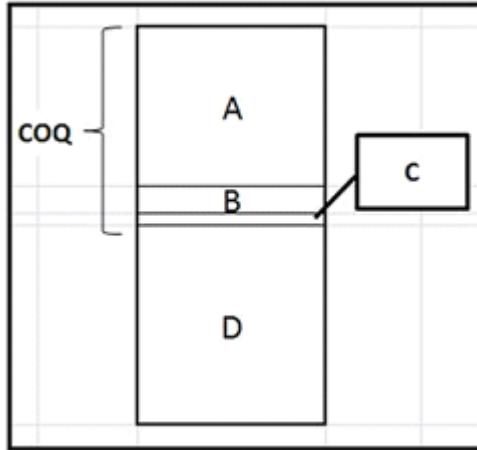
Answer:

D

Question 8

Question Type: MultipleChoice

In the diagram



In the Cost of Quality diagram shown, the COQ cost labeled "A" represents:

Options:

- A-** Prevention Costs
- B-** Failure Costs
- C-** Appraisal Costs
- D-** Cost of Production

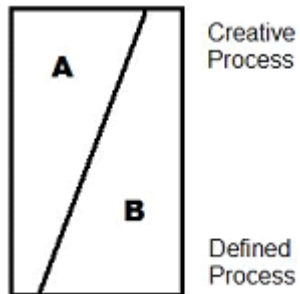
Answer:

B

Question 9

Question Type: MultipleChoice

In the diagram



In the diagram, the sections of the diagram labeled "A" and "B" represent larger portions of "DO" and "CHECK". Note that the top of the diagram represents a more creative process and lower portion a more defined process.

Options:

- A- A = DO, B = CHECK
- B- A = CHECK, B = DO
- C- A and B are same

Answer:

B

Question 10

Question Type: MultipleChoice

The purpose of a security awareness program is to achieve all of the following objectives, EXCEPT:

Options:

- A- Have individuals understand their security roles or responsibility
- B- Have individuals understand the organization's security policy
- C- Have individuals implement security practices into their software
- D- Have individuals understand the security controls in place to protect IT resources

Answer:

C

To Get Premium Files for CSQA Visit

<https://www.p2pexams.com/products/csqa>

For More Free Questions Visit

<https://www.p2pexams.com/software-certifications/pdf/csqa>

